

## Tangram hexagons: Answers

<http://topdrawer.aamt.edu.au/Geometric-reasoning/Misunderstandings/Classifying-polygons/Hexagonal-tangrams>

### Convex hexagons

1.



4.



2.



5.



3.




## Non-convex hexagons

6.



10.



7.



11.




8.



12.




9.



13.




14.



15.



16.



17.




18.



19.



20.




21.




22.




23.



24.



28.




25.



29.



26.



30.



27.

